





Use the arrays below to answer each set of questions.

1.  a. How many rows of cars are there? _____
b. How many cars are there in each row? _____

2.  a. What is the number of rows? _____
b. What is the number of objects in each row? _____

3.  a. There are 4 spoons in each row. How many spoons are in 2 rows? _____
b. Write a multiplication expression to describe the array. _____

4.  a. There are 5 rows of triangles. How many triangles are in each row? _____
b. Write a multiplication expression to describe the total number of triangles.
