

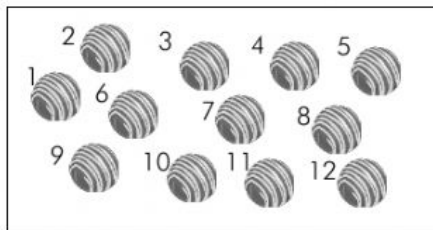


2. The picture below shows 2 groups of apples. Does the picture show  $2 \times 3$ ? Explain why or why not.



3. Draw a picture to show  $2 \times 3 = 6$ .

4. Caroline, Brian, and Marta share a box of chocolates. They each get the same amount. Drag the chocolates to the boxes on the right to show 3 groups of 4. Then, write a repeated addition sentence and a multiplication sentence to represent the picture. Fill the boxes in the order that the chocolates are numbered.



Caroline

Brian

Marta