




Renaissance Inventions and Instruments

Name _____ Grade _____ Date _____

Instructions. Label the instruments below using the words below. Not every word will be used.
(1pt each)

A. Label the instruments below using the words below.

Lateen	Carrack	Throwing led	Quadrant
Compass	Hourglass	Printing Press	Log



Instructions. Match the instrument or invention with the correct description. (1 pt. each)

Column A

1. _____ Compass
2. _____ Almanac
3. _____ Quadrant
4. _____ Astrolabe
5. _____ Log
6. _____ Hourglass
7. _____ Throwing Lead
8. _____ Carrack
9. _____ Lateen
10. _____ Caravel
11. _____ Printing Press

Column B

- A. Tell latitude.
- B. Large ship steered by a rudder.
- C. Calculate the speed of the ship.
- D. Adjustable to catch wind from different directions
- E. Used to check angles and calculate latitude.
- F. Measure time.
- G. A machine used to produce printed copies.
- H. Observe and calculate the position of the stars.
- I. Ship first used by the Portuguese.
- J. Used to measure the depth of water.
- K. Gave direction, always pointed True North.