






Notes in Music

A. True or False

Type **T** if the statements below are True and **F** if the statements below are False

1. Notes tell the musician when to rest
2. Notes tell the musician how long to play
3. Notes are measured in beats
4. Notes represent sound
5. A whole note has a longer duration than a half note
6. All notes have stems
7. All notes with stems have tails/flags
8. Notes above the 3rd line are written with their stems going up and on the left
9. Notes below the 3rd line are written with their stems going up and on the right
10. When notes are joined together by their flags/tails, it is called beaming.

B. Complete the table

Note	American Name	European Name	Beats/Counts
			
		Minim	
	Quarter note		
			1/2
		Semiquaver	