

Name: _____ Grade: _____

Lines and Angles

1. Match each word with the correct statement. Write the correct letter on the line.

_____ (i) Point

_____ (ii) Line Segment

_____ (iii) Angle

_____ (iv) Ray

_____ (v) Plane

_____ (vi) Perpendicular Lines

_____ (vii) Parallel Lines

a) Part of a line having one end point.

b) An exact location in space.

c) The shape formed when two rays meet at a vertex.

d) A flat shape which extends endlessly in all directions.

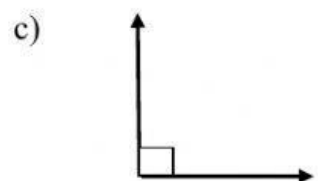
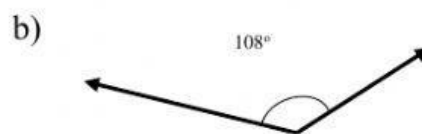
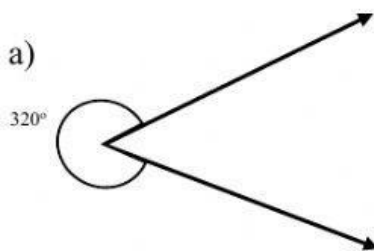
e) Two or more lines that travel in the same direction and never meet.

f) Part of a line having two endpoints.

g) Two lines that cross to form a right angle.

h) Two or more lines that cross or meet each other at a point.

3. Write acute, obtuse, right, straight or reflex to describe the angels below.



d) 181° _____

e) 87° _____

f) 351° _____