


Decimal Place Value Grade 4


Writing the decimals

1)



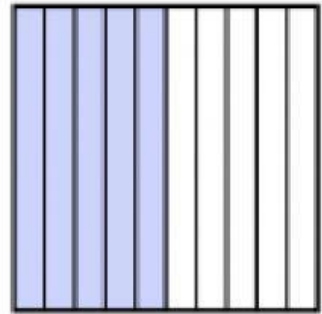
- A. 0.1
- B. 10
- C. 100
- D. 0.01

2)



- A. 97
- B. 0.97
- C. 0.097
- D. 970

3)



- A. 5
- B. 0.05
- C. 50
- D. 0.5

Write the numbers in word form.

(4) .58

(5) .181

(6) 1.8

(7) 3.4

Write the decimal.

(8) six tenths

(9) twenty-five hundredths

(10) five hundred twenty-eight thousandths

(11) one and four-tenths

Write the place for each underlined decimal.

(12) 693

(13) 6.394

(14) 7.422

(15) 3.52