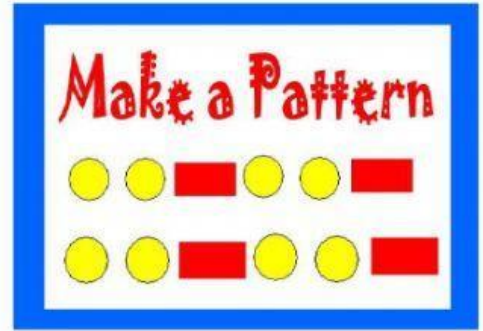






Name: _____

Date: _____

Mathematics
Special Number Patterns Test



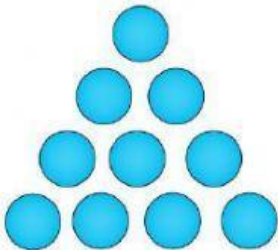


1. Write the square numbers to match the arrays. (4)



--	--	--	--

2. Write the triangular numbers to match the arrays. (3)



--	--	--

3. Oblong numbers follow the pattern:

1 x 2, 2 x 3, 3 x 4

What are the next TWO oblong numbers? _____

4. Read each statement. Write true if the statement is true. Write false if the statement is false. (5)

(a) 36 is a square number _____

(b) 11 is a rectangular number _____

(c) 3 is a triangular number _____

(d) 42 is an oblong number _____

(e) 13 is a rectangular number _____