


Decimal Place Value using Base-Ten Models
HOMEWORK GRADE

This model is shaded to represent  = 1 whole.

1. What number does this model represent?




- a. 2.111
- b. 2.211
- c. 0.211


2. What number does this model represent?



- a. 1.21
- b. 0.121
- c. 1.021

This model is shaded to represent  = 1 whole.

3. What number does this model represent?



- a. 3.01
- b. 0.31
- c. 3.1

4. What number does this model represent?



- a. 7.2
- b. 0.72
- c. 0.072