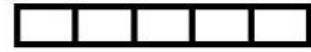


GOVERNMENT PRIMARY SCHOOL
THAKKALORE

AREA AND PERIMETER WORKSHEET

write the area and perimeter of each figure

1 P= _____ A= _____



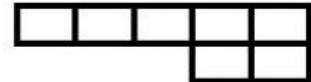
2 P= _____ A= _____



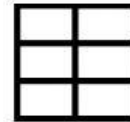
3 P= _____ A= _____



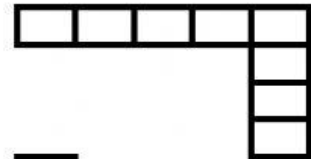
4 P= _____ A= _____



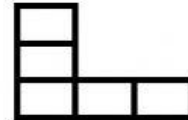
5 P= _____ A= _____



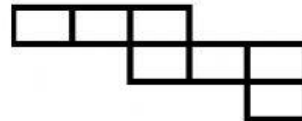
6 P= _____ A= _____




7 P= _____ A= _____



8 P= _____ A= _____



9 P= _____ A= _____



10 P= _____ A= _____

