









## MATHEMATICS 5

Type the value of each set of bills and coins in the box provided, then count the total amount.

			_____
			_____
			_____
<b>Total: ₱</b>			

			_____
			_____
			_____
<b>Total: ₱</b>			

Compare the two amounts of money. Write **greater than**, smaller **than** or **equal to** inside the box.



is



is



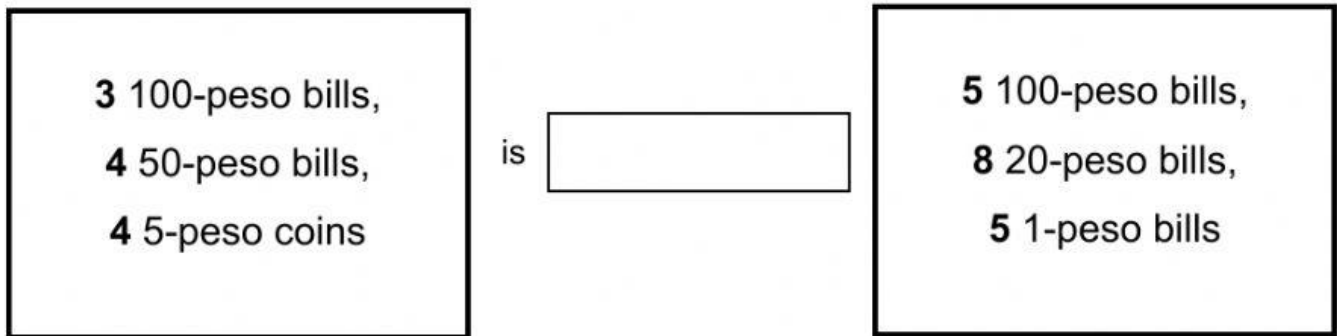
is



3 1000-peso bills,  
4 200-peso bills,  
5 10-peso coins

is

5 500-peso bills,  
8 100-peso bills,  
5 10-peso bills



Solve for the following word problems. Write your solution and answer in the box provided.

PROBLEM	SOLUTION and ANSWER
1. Jenna bought a 400-peso and a 600-peso ticket for the <b>Greatest Showtime</b> . How much did Jenna pay altogether?	
2. Hayley had three weeks to save for her father's upcoming birthday. She saved ₱ 150 on the first week. ₱ 300 on the second week and ₱ 500 on the third week. How much money was she able to save in all?	