


Name: _____




Time by the Hour

Directions: Write the time for each clock.



:00



:00




:00



:00




:00



:00




:00



:00



:00



:00