







1. Count the items, write the numbers and solve the addition.

 
 + =

 
 + =

2. Count the items, place the **X** on the pictures that are subtracted and solve the equation writing the number in the box.



 $8 - 2 =$


 $10 - 5 =$

X X X X X X X X

3. Listen the word problem and observe the drawing to understand it. Write the equation.

There are 3 monkeys.



Then, 2 monkeys join them.

$$\underline{\quad} + \underline{\quad} = \underline{\quad}$$

There are 3 rabbits.



Then, 1 rabbit hops away.

$$\underline{\quad} - \underline{\quad} = \underline{\quad}$$

X X X X X X X X

4. Listen and match with the corresponding hour o'clock.

I wake up at seven o'clock




I take a shower at nine o'clock



I have snack at ten o'clock



5. Listen and choose.



6. Place the shapes in the correct box



2D Plane shapes	3D Solid shapes

CONGRATULATIONS!



**GOOD
JOB!**