

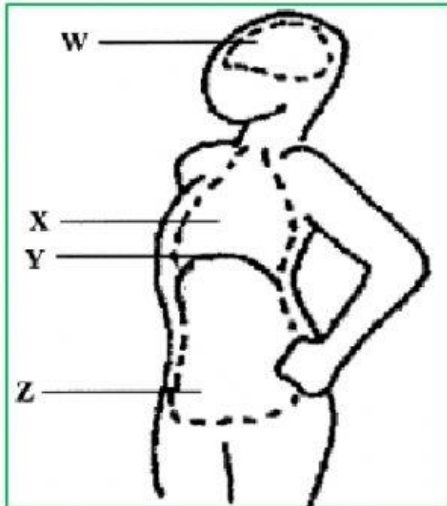
BODY CAVITIES WORKSHEET

Name: _____

Date: _____

Follow all instructions.

1. Label the following parts of the diagram using the word bank.



W: _____

X: _____

Y: _____

Z: _____

Word Bank

Diaphragm

Thoracic cavity

Cranial cavity

Abdominal cavity

2. Use the words in the word box to fill in the blanks.

A. The _____ is made of skeletal muscle tissue.

B. The diaphragm helps with _____.

C. The _____ cavity is the largest one in the body.

D. The brain is found in the _____ cavity.

E. A cavity is an _____ space.

F. The diaphragm separates the abdominal and _____ cavities.

WORD BOX

Abdominal

Breathing

Cranial

Diaphragm

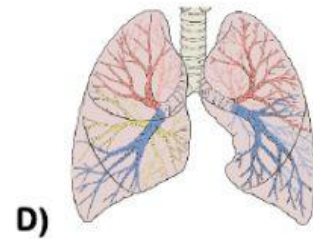
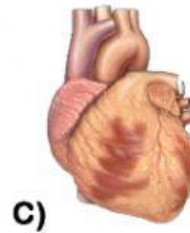
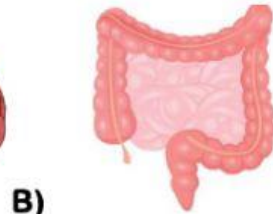
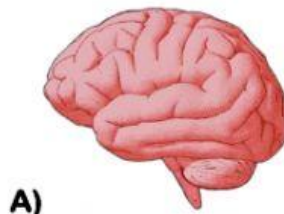
Empty

Ovary

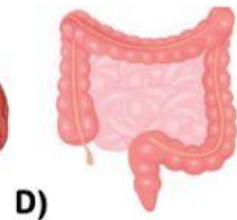
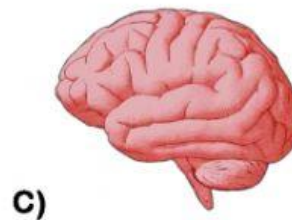
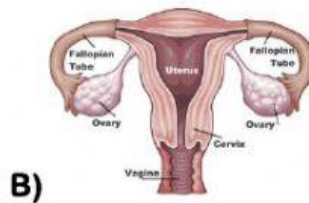
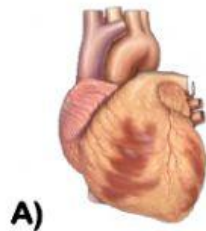
Thoracic

3. Instructions: Answer each question correctly.

1. Circle the organ that belongs to the nervous system. [1]



2. Circle the organ that belongs to the digestive system [1]



3. Circle the organ that belongs to the respiratory system [1]

