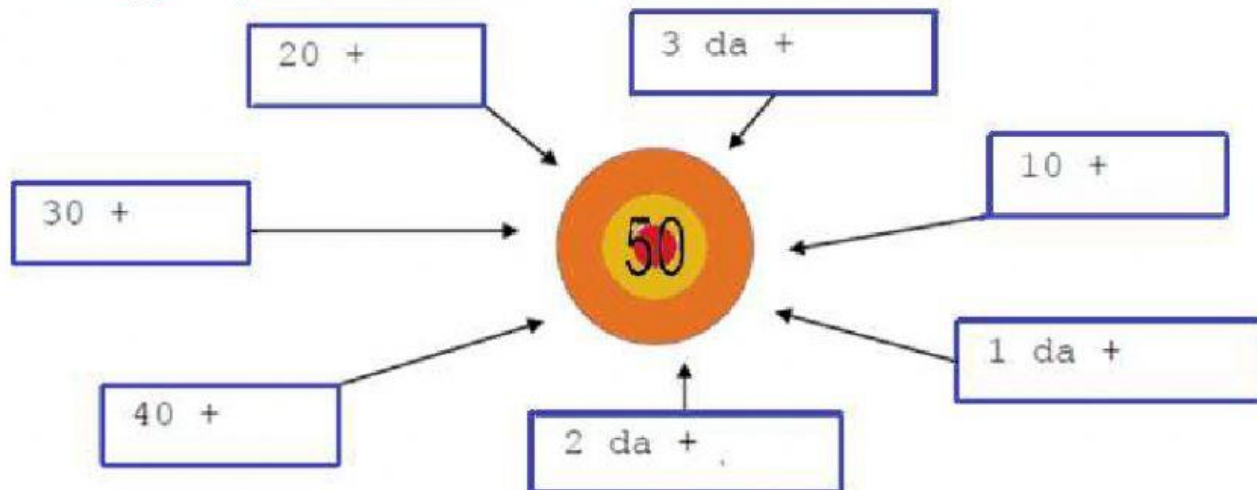




Raggiungi il 50 addizionando solo decine.



Completa le catene di operazioni con il calcolo mentale.

$$32 \xrightarrow{+4} \square \xrightarrow{+5} \square \xrightarrow{+9} \square \xrightarrow{-6} \square \xrightarrow{-3} 41$$

$$48 \xrightarrow{-6} \square \xrightarrow{+7} \square \xrightarrow{-8} \square \xrightarrow{+5} \square \xrightarrow{+9} 55$$

$$58 \xrightarrow{-4} \square \xrightarrow{+3} \square \xrightarrow{+2} \square \xrightarrow{-9} \square \xrightarrow{-6} 44$$

$$33 \xrightarrow{+6} \square \xrightarrow{-39} \square \xrightarrow{+57} \square \xrightarrow{-4} \square \xrightarrow{+3} 56$$



Trova il numero

36	39	42	45		51	54
----	----	----	----	--	----	----



49	47	45	43	41		37
----	----	----	----	----	--	----



24	29	34	39		49	54
----	----	----	----	--	----	----



Maestra Patrizia







 *Scrivi il numero precedente ed il numero successivo*

 49 

 42 



 48 


 50 



 36 



 44 



 33 

 49 

 17 

 31 

 20 

 35 

 *Completa la tabella dei numeri mancanti*

1			4					9	10
	12		14			17			20
21		23		25			28		
	32				36			39	40
41				45			48		

 *Inserisci < > =*

45  47

50  29

13  13

41  12

52  52

31  23

11  37

40  40

20  60

20  20

10  50

7  11

Maestra Patrizia

