

# Coral International Bilingual School



## Preparatory Math Evaluation


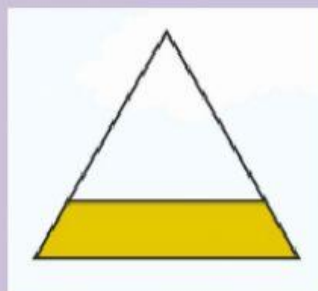


Name: \_\_\_\_\_



Drag the picture and tell which shape has equal parts and which does not.

Equal	No Equal
$\frac{1}{2}$ 😊	$\frac{1}{2}$ ☹️
	





Write the missing numbers.

**Counting  
by 2s.**

10		14			20
----	--	----	--	--	----

**Counting  
by 5s.**



5		15	20		30
---	--	----	----	--	----

**Counting  
by 10s.**

		30		
		80		



Let's solve subtractions, write your answer.



Let's solve additions, write your answer.

$$3 + 1 = \square$$

$$5 + 1 = \square$$