

SCIENCE

Second Grade

*CP Week 40 and 41

Total Points: 15



Name: _____

Date: Tues., Nov. 17th, 2020.

I. SOUND

A) Drag the term to complete the following phrases. (4 pts)

1. _____ is how **LOUD** or _____ a sound is.

loudness

pitch

soft

low

2. _____ is how _____ or **HIGH** a sound is.

loudness

pitch

soft

low

B) Drag the following images to where they belong. Do they produce a loud or a soft sound? (4 pts)



SOFT SOUND






LOUD SOUND

C) Select YES or NO. (2 pts)

- | | | |
|--|-----|----|
| 1. A loud sound takes more energy. | YES | NO |
| 2. A soft sound takes less energy. | Yes | NO |

II. TYPES OF MOVEMENTS

A) Match the type of movement on the left, with the correct picture on the right. (5 pts)

- | | | | |
|-------------------|---|---|---|
| 1. zigzag | ◆ | ◆ |  |
| 2. straight | ◆ | ◆ |  |
| 3. curve | ◆ | ◆ |  |
| 4. back and forth | ◆ | ◆ |  |
| 5. circle | ◆ | ◆ |  |