


Grade 1-Term 1


Math L. 3.4-3.7-3.11



Directions:

1. Write the sums. When you are done, scroll down and click **(Finish)**.
2. Then follow the **6 steps below**.


Check my answers


Email my answers to my teacher

Step 1:
Click on this.

Enter your full name:

Group/level:

School subject:

Enter your teacher's email or key code:

Send

Step 2

Step 3:
Write your Grade
(1A, 1B, 1C)

Step 4: Write Math

Step 5:
rasha.hashash@gmail.com

Step 6

Find the worksheet below .

Grade 1-Term 1
Math L. 3.4-3.7-3.11



A. Write the sum for each double fact to help you find the doubles plus 1.

| | | |
|-------------------|----|-------------------|
| $1 + 1 = \square$ | so | $1 + 2 = \square$ |
| $3 + 3 = \square$ | so | $3 + 4 = \square$ |
| $5 + 5 = \square$ | so | $5 + 6 = \square$ |
| $4 + 4 = \square$ | so | $4 + 5 = \square$ |
| $6 + 6 = \square$ | so | $6 + 7 = \square$ |

B. Match each addition sentence to the write sum.

$7 + 1 =$

$3 + 2 =$


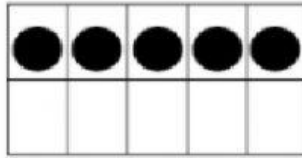

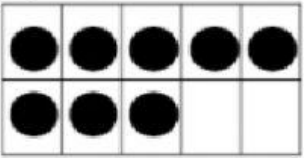
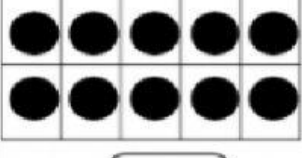
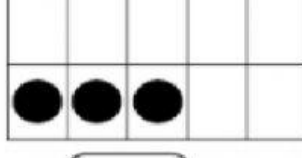

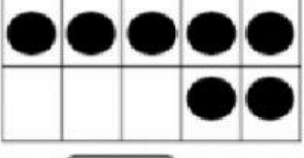
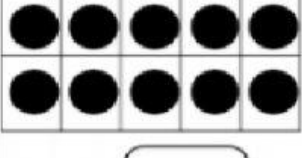
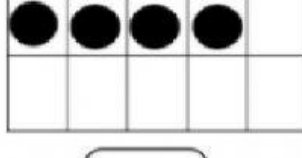
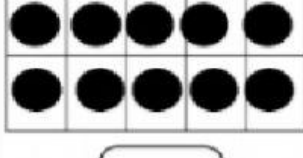
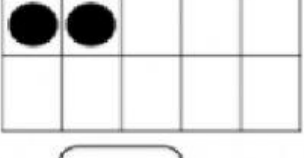
$4 + 3 =$

5

8

7

C. Complete the addition sentences and write the sum.

| | |
|--|---|
|   <div style="display: flex; align-items: center; justify-content: center; gap: 10px;"> <div style="border: 1px solid black; width: 40px; height: 40px; display: flex; align-items: center; justify-content: center;"> </div> <div>+</div> <div style="border: 1px solid black; width: 40px; height: 40px; display: flex; align-items: center; justify-content: center;"> </div> <div>=</div> </div> <div style="text-align: center; margin-top: 10px;">_____</div> |   <div style="display: flex; align-items: center; justify-content: center; gap: 10px;"> <div style="border: 1px solid black; width: 40px; height: 40px; display: flex; align-items: center; justify-content: center;"> </div> <div>+</div> <div style="border: 1px solid black; width: 40px; height: 40px; display: flex; align-items: center; justify-content: center;"> </div> <div>=</div> </div> <div style="text-align: center; margin-top: 10px;">_____</div> |
|   <div style="display: flex; align-items: center; justify-content: center; gap: 10px;"> <div style="border: 1px solid black; width: 40px; height: 40px; display: flex; align-items: center; justify-content: center;"> </div> <div>+</div> <div style="border: 1px solid black; width: 40px; height: 40px; display: flex; align-items: center; justify-content: center;"> </div> <div>=</div> </div> <div style="text-align: center; margin-top: 10px;">_____</div> |   <div style="display: flex; align-items: center; justify-content: center; gap: 10px;"> <div style="border: 1px solid black; width: 40px; height: 40px; display: flex; align-items: center; justify-content: center;"> </div> <div>+</div> <div style="border: 1px solid black; width: 40px; height: 40px; display: flex; align-items: center; justify-content: center;"> </div> <div>=</div> </div> <div style="text-align: center; margin-top: 10px;">_____</div> |
|   <div style="display: flex; align-items: center; justify-content: center; gap: 10px;"> <div style="border: 1px solid black; width: 40px; height: 40px; display: flex; align-items: center; justify-content: center;"> </div> <div>+</div> <div style="border: 1px solid black; width: 40px; height: 40px; display: flex; align-items: center; justify-content: center;"> </div> <div>=</div> </div> <div style="text-align: center; margin-top: 10px;">_____</div> |   <div style="display: flex; align-items: center; justify-content: center; gap: 10px;"> <div style="border: 1px solid black; width: 40px; height: 40px; display: flex; align-items: center; justify-content: center;"> </div> <div>+</div> <div style="border: 1px solid black; width: 40px; height: 40px; display: flex; align-items: center; justify-content: center;"> </div> <div>=</div> </div> <div style="text-align: center; margin-top: 10px;">_____</div> |