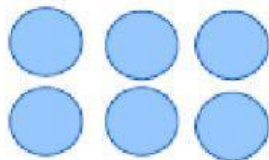



## Multiplication sentences and arrays

### Grade 3 Multiplication Worksheet

Write a multiplication equation to find the number of shapes.



$$\square \times \square = \square$$




$$\square \times \square = \square$$



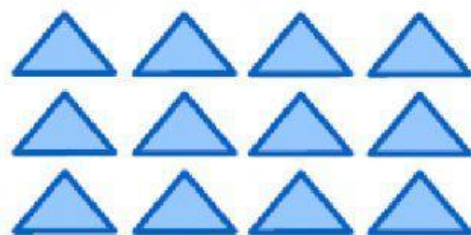
$$\square \times \square = \square$$



$$\square \times \square = \square$$



$$\square \times \square = \square$$



$$\square \times \square = \square$$