




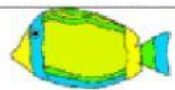
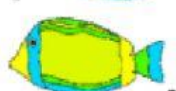








1)	<p>There are 6 .</p> <p>5 more  come.</p> <p>How many are there now? _____</p>
2)	<p>I have 7 .</p> <p>I am given 5  more.</p> <p>How many  do I have? _____</p>
3)	<p>Bert has 4 .</p> <p>Bill has 8 .</p> <p>How many in all? _____</p>
4)	<p>A cake shop sells 8  on Monday, and 5  on Tuesday.</p> <p>How many  in total? _____</p>
5)	<p>I buy 7  on Wednesday.</p> <p>I buy 4  on Friday.</p> <p>How many  did I buy? _____</p>