


# Landforms Match - Part 1

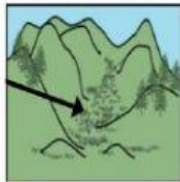
DIRECTIONS – Draw a line to match the picture of each landform from your workbook to a real life picture of each landform.



mountain



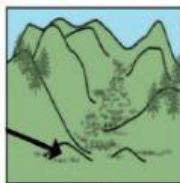
plain



valley



island



hill



plateau

