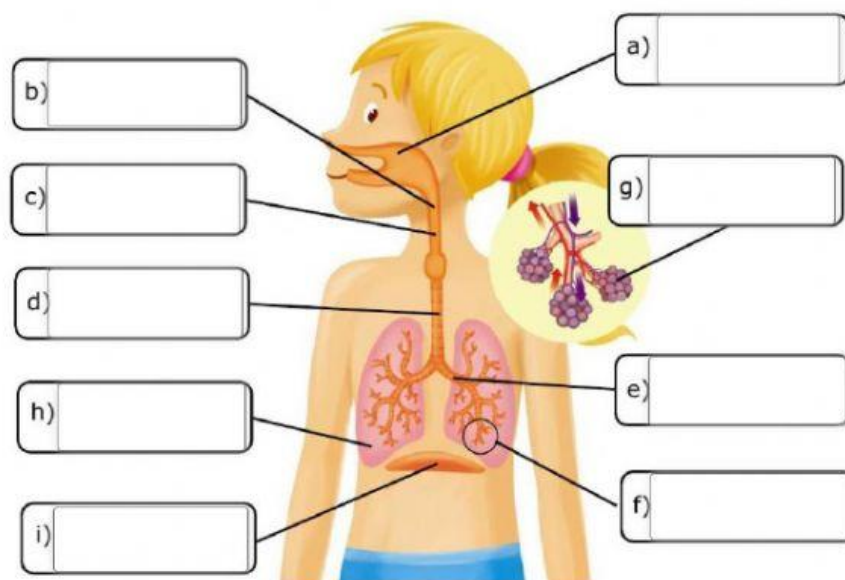


THE RESPIRATORY SYSTEM

1/ Answer the following questions:

- What gas does human being take in when we breathe?
- What gas does human being eliminate during respiration?
- Is respiration a voluntary or involuntary action?

2/ Label the parts of the respiratory system:



Bronchioles	Nasal cavity		Alveoli	pharynx
Larynx	Lungs	Trachea	diaphragm	Bronchi

a/

b/

c/

d/

e/

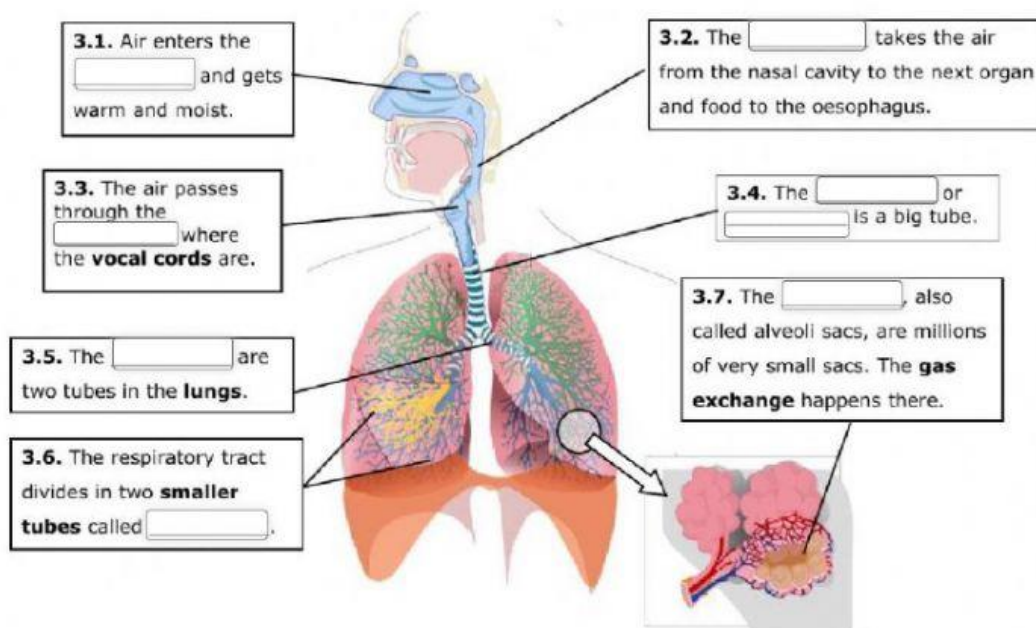
f/

g/

h/

i/

3/ Complete:



3.1/

3.2/

3.3/

3.4/

3.5/

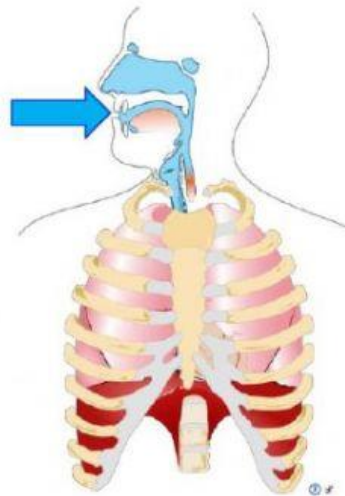
3.6/

3.7/

4/ Choose the correct option:

INHALATION

- We breathe **in/out** (1) air.
- Our lungs get **smaller/bigger** (2) .
- We inhale **oxygen/carbon dioxide** (3) .
- The air passes to our **lungs/blood** (4) and then our **lungs/blood** (5) .



a/

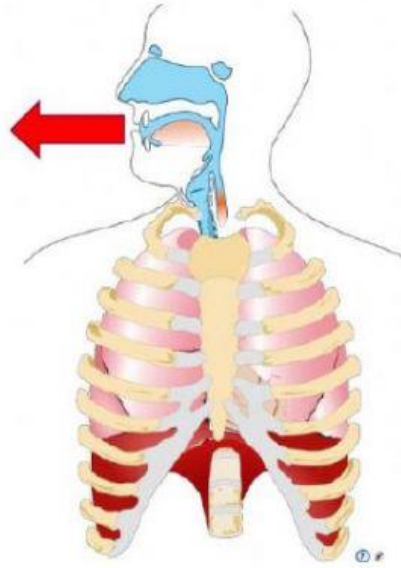
b/

c/

d/

EXHALATION

- We breathe **in/out** (6) air.
- Our lungs get **smaller/bigger** (7) .
- We exhale **oxygen/carbon dioxide** (8) because our body doesn't need it.



a/

b/

c/