



Mathematics Evaluation




1. Count the objects and write the numeral and its word name.

	
<p>Numeral: _____</p> <p>Word name: _____</p>	<p>Numeral: _____</p> <p>Word name: _____</p>

2. Complete the number sequences below:

<p>Write the number which comes between.</p> <p>13, <input type="text"/>, 15</p>	<p>Write the number which comes after.</p> <p>9, 10, <input type="text"/></p>	<p>Write the number which comes before.</p> <p><input type="text"/>, 16, 17</p>
---	--	--

3. Choose the set with 12 objects.

		
---	---	---

4. Write the numbers below in Ascending Order:

6	4	12	19	11
---	---	----	----	----

--	--	--	--	--

5. Compare the objects and complete the statements that follow:



The basketball is _____ than the flower.

The flower is _____ than the basketball.

6. How many paperclips is the length of the pencil?



The length of the pencil is _____ paperclips.

7. Choose either $<$ or $>$ to compare the numbers below:

a) 17 \bigcirc 14

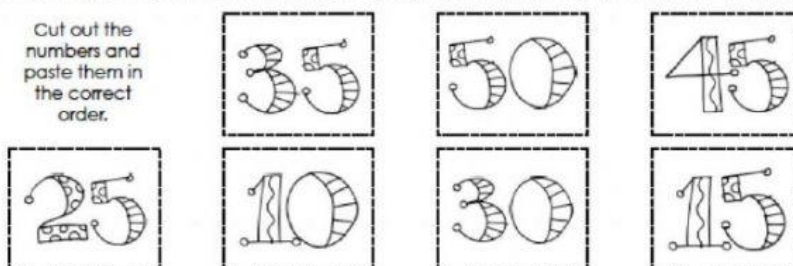
b) 4 \bigcirc 20

8. Place each number in its correct place when counting by 5's.

I can skip count by 5's...

5			20	
		40		

Cut out the numbers and paste them in the correct order.



9. Choose the activity that takes **more time**.



10. Using the words below, name each solid shape.

Choose either YES or NO if the solid can Roll, Slide or Stack.


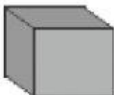



Cuboid

Sphere

Cube

Cylinder

Cone

Shape	Roll	Slide	Stack
	Yes	Yes	No
	_____	_____	_____
	_____	_____	_____
	_____	_____	_____
	_____	_____	_____

11. Select the coins to buy the fruit.



15c



Mrs. Sookoo – Second Year Mathematics Evaluation Test
Friday 6th November 2020

12. The table picture below shows 7 students standing in a line.

Sam is 1st and Tom is 7th in the line.

a) Put in the missing positions in the missing spaces below each student.

						
Sam	Jane	Harry	Tim	Elsa	Anna	Tom
1 st						

b) Complete the sentences:

- _____ is 4th in the line.
- Anna is standing in the _____ position.

13. Choose the correct option(s) that equal to \$10.

Option 1:



Option 2:



14. Complete the number sentences below:

a) $7 + 3 + 2 = \underline{\hspace{2cm}}$

b) $16 - 5 = \underline{\hspace{2cm}}$

15. Solve the word problems below:

a) Mark picks **9** cherries on Monday.

He picks **6** more cherries on Tuesday.

How many cherries does Mark have in all?





	+		=
<u> </u>	+	<u> </u>	= <u> </u>

Mark has cherries in all.

b) Pam has **18** cakes.

She gave **8** of the cakes to her friends.

How many cakes does Pam have left?


	-		=
	-		=
<u> </u>	-	<u> </u>	= <u> </u>

Pam has cakes left.

16.



\$3



\$8

a) I bought a Ring-Pop and paid with \$5.


















My change was \$ _____.

b) Sally bought a Ring-Pop and a sandwich. She paid with \$20.

Her change was \$ _____.

17. Answer the questions about the Pictograph.

Favourite Ice Cream

Ice Cream Type	Number of Votes
Chocolate 	      
Strawberry 	 
Cookies and Cream 	    

 = 1 vote

a) Which ice cream flavour is the most liked?

b) Which ice cream flavour is liked the least?

c) How many more students like Cookies and Cream than Strawberry flavoured ice cream?

d) How many students are there in all?
