

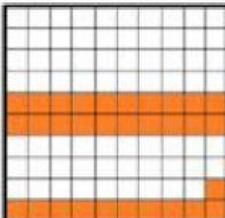



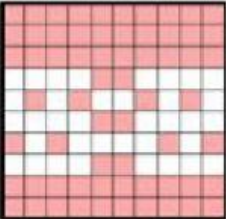



### Fração decimal e número decimal

Ligue as frações e arraste os números decimais às figuras correspondentes:

|                  |   |  |                  |
|------------------|---|--|------------------|
| $\frac{2}{10}$   |    |    | $\frac{9}{10}$   |
|                  | n. decimal  | n. decimal   |                  |
| $\frac{4}{10}$   |   |   | $\frac{3}{10}$   |
|                  | n. decimal  | n. decimal   |                  |
| $\frac{64}{100}$ |  |  | $\frac{53}{100}$ |
|                  | n. decimal  | n. decimal   |                  |
| $\frac{31}{100}$ |  |  | $\frac{5}{10}$   |
|                  | n. decimal  | n. decimal   |                  |
| <b>0,9</b>       |   |  | <b>0,3</b>       |
| <b>0,4</b>       | <b>0,64</b>   | <b>0,2</b>   | <b>0,31</b>      |
|                  |   |  | <b>0,5</b>       |
|                  |   |  | <b>0,53</b>      |