








NAME: _____

GROUP: SECOND __ GRADE

DATE: _____

Select if you have to color. After, answer the questions//Selecciona si debes colorearla. Luego responde las preguntas



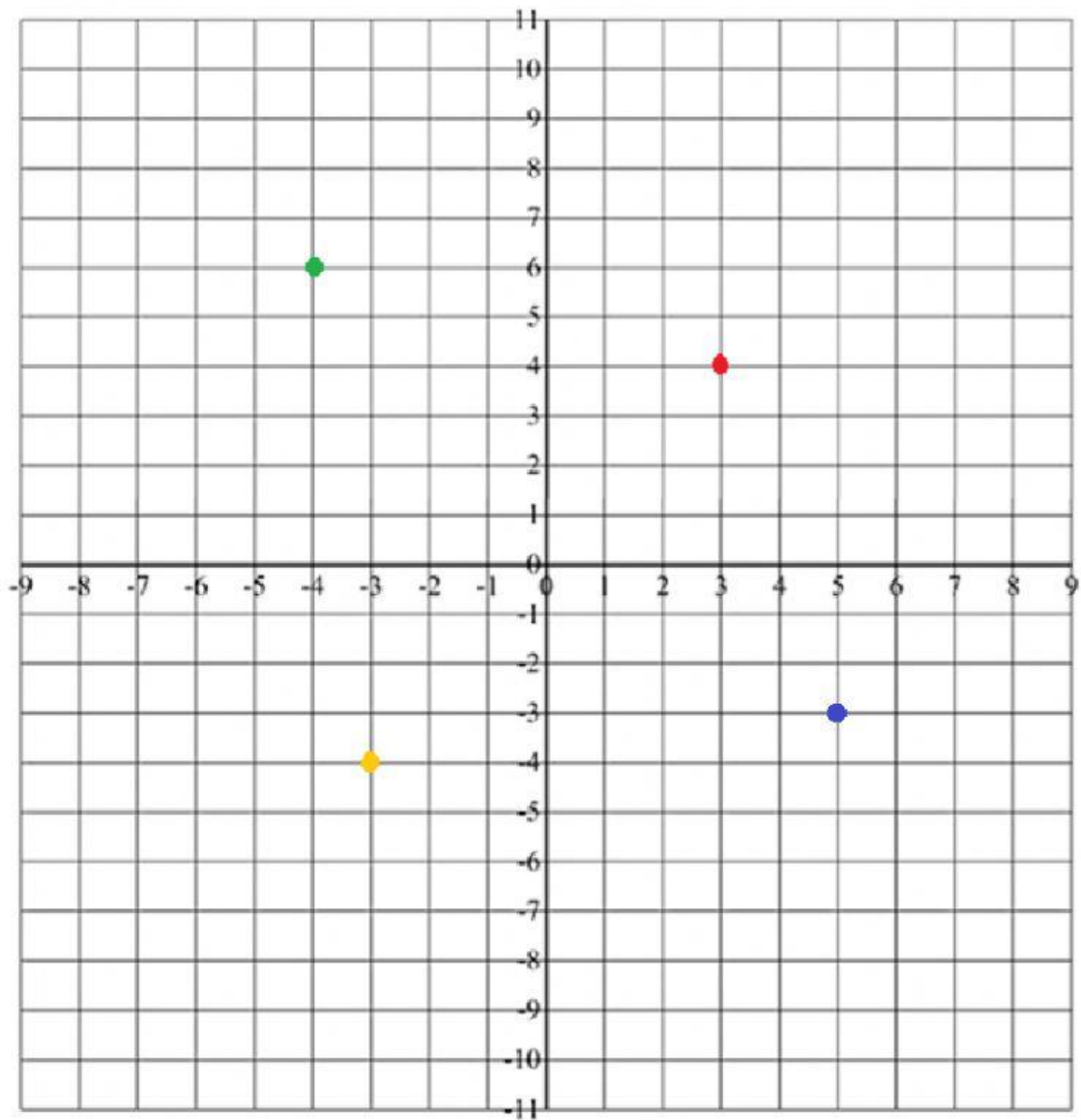
Number of Balls				
6				
5				
4				
3				
2				
1				
0				
	Beach Ball 	Foot Ball 	Soccer Ball 	Base Ball 
				Basket Ball 

- a) How many beach balls are there? _____
- b) How many balls are there in all? _____
- c) Do you have more soccer balls or basketballs? _____
- d) Which one has the less quantity? _____



MATH 4th TERM

2) Choose the corresponding color to every coordinate./ Escoge el color correspondiente a cada coordenada



a) $(-3, -4) =$

b) $(3, 4) =$

c) $(-4, 6) =$

d) $(5, -3) =$