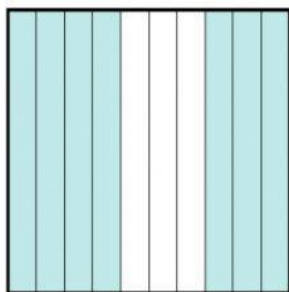



Ejercitación números decimales.

Escribe la fracción y el número decimal.

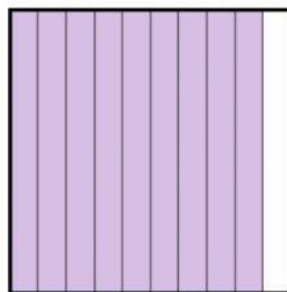
1)



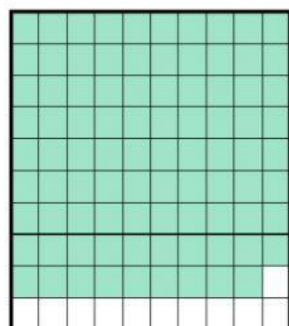
2)



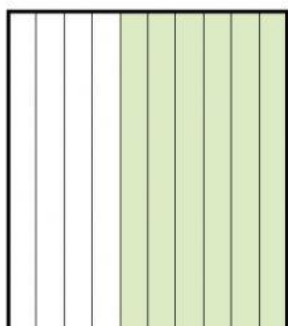
3)



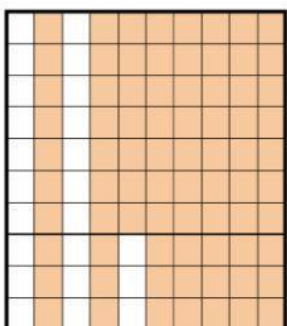
4)



5)



6)



Escribe los siguientes decimales como fracción:

$$0,023 = \underline{\hspace{2cm}}$$

$$734,2 = \underline{\hspace{2cm}}$$

$$2,467 = \underline{\hspace{2cm}}$$

$$6,03 = \underline{\hspace{2cm}}$$

$$12,45 = \underline{\hspace{2cm}}$$

$$1,1 = \underline{\hspace{2cm}}$$