


Topic 5.1 Arrays and Multiplying by 10 and 100

Find each product.




1. $5 \times 10 =$ _____



2. $2 \times 100 =$ _____




3. $3 \times 10 =$ _____



4. $3 \times 100 =$ _____



5. $6 \times 10 =$ _____



6. $5 \times 100 =$ _____

7. Mr. Miguel does 100 sit-ups every morning. How many sit-ups will he do in 7 days?
- A** 70 **B** 100 **C** 107 **D** 700
8. Ivanna has 10 groups of pennies with 3 pennies in each group. Julia has 5 groups of pennies with 100 pennies in each group. Who has more pennies?
9. Sandy used addition to find 9×100 and she said the product was 90. Is she right or wrong?
10. Matias has 6 bags of balloons with 8 balloons in each bag. Rodrigo has 4 bags of balloons with 10 balloons in each bag. Who has more balloons?