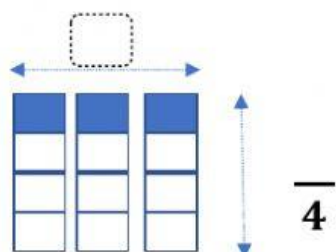


Choose the multiplication statement for the given model

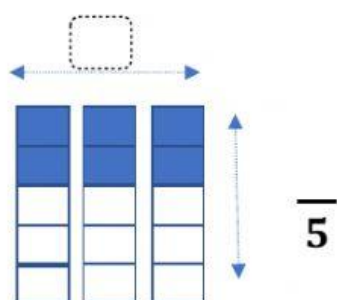
1)



$$\square \times \frac{1}{4} =$$

$$\text{---} \times \frac{1}{4} = \text{---}$$

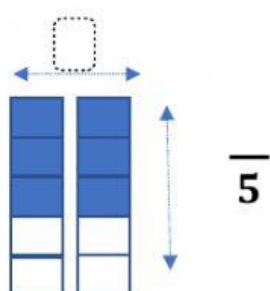
2)



$$\square \times \frac{2}{5} =$$

$$\text{---} \times \frac{2}{5} = \text{---}$$

3)



$$\square \times \frac{4}{5} =$$

$$\text{---} \times \frac{4}{5} = \text{---}$$