


less than

Comparing Groups of  
 Numbers  
 Activity 1


more than

Name: \_\_\_\_\_


1. Complete the number sentence below and say which is **more** than or **less** than: example:




$6 - 3 = \underline{\quad 3 \quad}$   
 3 is less than 6




2.
 




$9 - 2 = \underline{\hspace{1cm}}$   
 2 is        than 9



3.
 



$8 - 4 = \underline{\hspace{1cm}}$   
       is        than



4.




$$10 - 5 = \underline{\hspace{2cm}}$$

   is    than   



5.



$$8 - 4 = \underline{\hspace{2cm}}$$

   is    than   



6.



$$9 - 3 = \underline{\hspace{2cm}}$$

   is    than   

