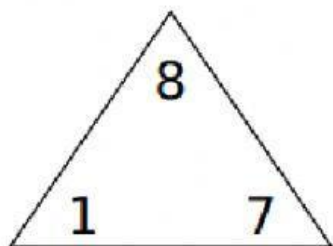


Fill in the missing numbers in the Fact Family Triangles

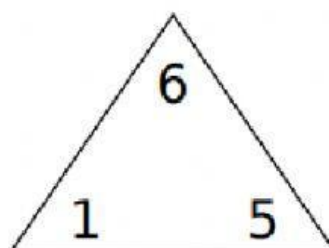


$$\square + \boxed{7} = \square$$

$$\boxed{7} + \square = \square$$

$$\square - \square = \boxed{7}$$

$$\square - \boxed{7} = \square$$

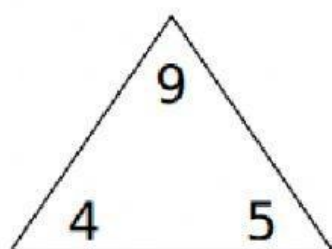


$$\boxed{1} + \square = \square$$

$$\square + \boxed{1} = \square$$

$$\square - \square = \boxed{1}$$

$$\square - \boxed{1} = \square$$

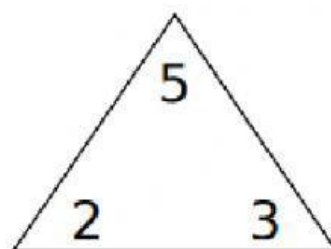


$$\square + \boxed{4} = \square$$

$$\boxed{4} + \square = \square$$

$$\square - \boxed{4} = \square$$

$$\square - \square = \boxed{4}$$



$$\boxed{2} + \square = \square$$

$$\square + \boxed{2} = \square$$

$$\square - \square = \boxed{2}$$

$$\square - \boxed{2} = \square$$