



# Ways to make 8

Count the dots in each box and place the correct number under each box to make 8.

	
$\underline{\quad\quad} + \underline{\quad\quad} = 8$	


2

4

	
$\underline{\quad\quad} + \underline{\quad\quad} = 8$	

6

3

	
$\underline{\quad\quad} + \underline{\quad\quad} = 8$	

4

5