



Tens and Units

Write how many tens and units.

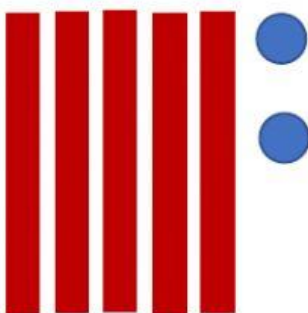
Then write the whole number.




$$= \underline{1} \text{ tens } \underline{3} \text{ units } = \underline{13}$$




$$= \underline{\quad} \text{ tens } \underline{\quad} \text{ units } = \underline{\quad}$$




$$= \underline{\quad} \text{ tens } \underline{\quad} \text{ units } = \underline{\quad}$$




= ____ tens ____ units = ____



= ____ tens ____ units = ____



= ____ tens ____ units = ____



= ____ tens ____ units = ____