

4th Class - Maths - 4. Knowing numbers

Name -

1. How many 100s are there in a 1000? _____
2. How many 200s are there in a 1000? _____
3. How many 500s are there in a 1000? _____

Fill in the boxes to complete the series.

1.





1000	1500					4000	
------	------	--	--	--	--	------	--
2.

2000	3000					8000	
------	------	--	--	--	--	------	--
3.

2000	4000			
------	------	--	--	--

Write the appropriate number in the box.

	  	 	<div style="border: 1px solid gray; width: 50px; height: 20px; margin: 0 auto;"></div>
---	---	--	--

				<div style="border: 1px solid gray; width: 50px; height: 20px; margin: 0 auto;"></div>
---	---	---	---	--