

1. Match the time.

1. It's three o'clock.

2. It's a quarter past eight.

3. It's ten thirty.

4. It's five to five.

5. It's nine twenty five.

6. It's twenty-five to eleven.

7. It's two to two.

8. It's eleven twenty-five.

9. It's five past eight.

10. It's twelve thirty-five.

a. 12.35

b. 8.05

c. 11.25

d. 1.58

e. 8.15

f. 4.55

g. 10.35

h. 9. 25

i. 10.30

j. 3.00



2. What time is it? Write in numbers .

1. It's seven thirty: _____

2. It's five to ten: _____

3. It's one to one : _____

4. It's a quarter past three : _____

5. It's eight forty-five: _____

6. It's ten past eleven: _____

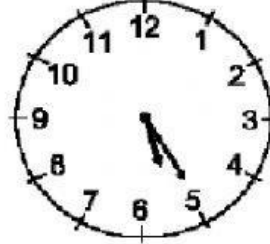
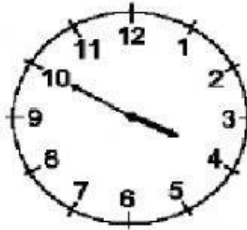
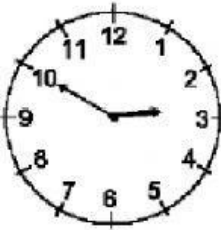
7. It's a quarter to three: _____

8. It's four thirty-five: _____

9. It's twelve o'clock: _____

10. It's two fifty-five: _____

3) Look at the clocks and write the time.



It's ten to three.

It's _____

It's _____

