


3º LOS COMPASES SIMPLES (REPASO)

1. Escribe el resultado de cada suma de figuras. Recuerda



$$\text{half note} + \text{half note} = \boxed{}$$

$$\text{quarter note} + \text{half note with a flat} + \text{eighth note pair} = \boxed{}$$


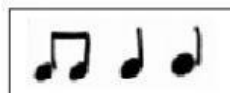
$$\text{quarter note} + \text{dotted quarter note} + \text{eighth note pair} = \boxed{}$$

$$\text{eighth note pair} + \text{eighth note pair} + \text{dotted quarter note} + \text{quarter note} = \boxed{}$$

$$\text{eighth note pair} + \text{half note} + \text{eighth note pair} = \boxed{}$$

$$\text{half note} + \text{half note} = \boxed{}$$

2. Coloca en cada hueco (compás) el ritmo que corresponda según los tiempos que sume.



Nombre y apellidos: _____ Curso: _____