

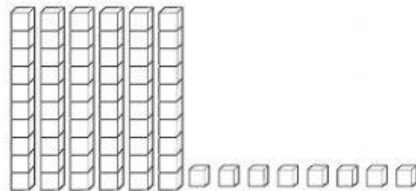
**Diagnostic and
Placement
Grade 3**

Name _____

Date _____

This test contains 30 multiple-choice questions. Work each problem in the space on this page. Select the best answer. Write the letter of the answer on the blank at the right.

- 1** Round the number shown below to the nearest 10. **1** _____



- A** 50 **B** 60 **C** 70 **D** 80

- 2** Find the sum of 1,245 and 2,360. **2** _____

- F** 2,505 **G** 3,505 **H** 3,595 **J** 3,605

- 3** TaLeah and two of her friends each have 20 stretchy bracelets. How many bracelets do they have in all? **3** _____


- A** 40 **B** 60 **C** 80 **D** 90

- 4** Which number sentences is true? **4** _____

- F** $4 \times 20 = 60$ **H** $8 \times 20 = 100$
G $4 \times 30 = 90$ **J** $5 \times 30 = 150$

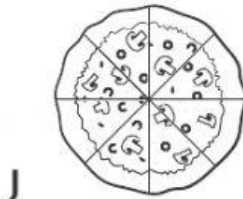
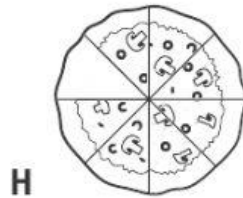
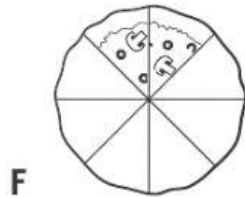
- 5** Each student has 8 marbles. Who has the greatest fraction of black marbles?

5 _____



- 6** Which pizza is more than half eaten?

6 _____



- 7** What number is located at Point A on the number line below?

7 _____



- A** $\frac{1}{4}$ **B** $\frac{1}{3}$ **C** $\frac{1}{2}$ **D** $\frac{2}{3}$