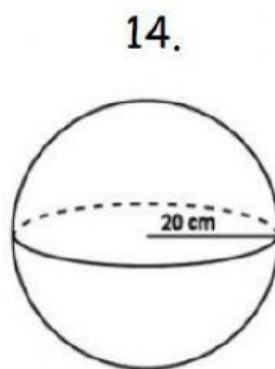
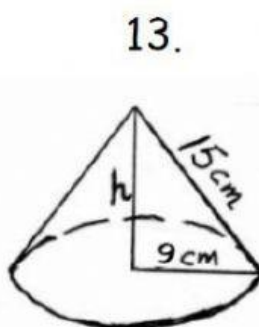
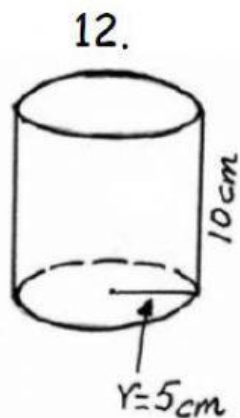
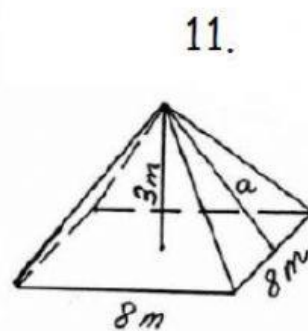
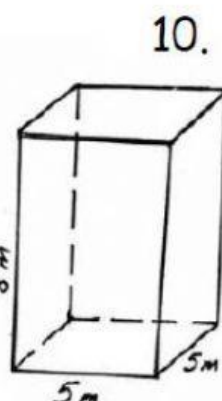
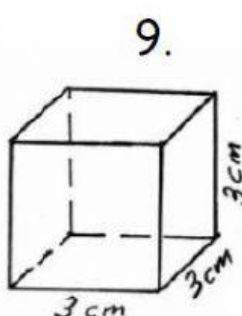
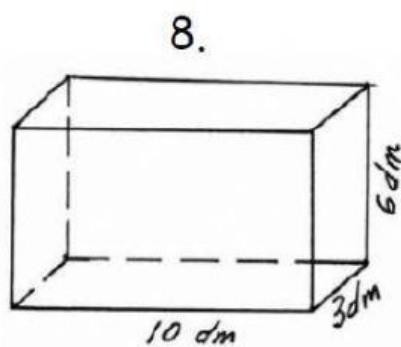
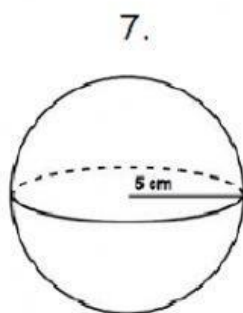
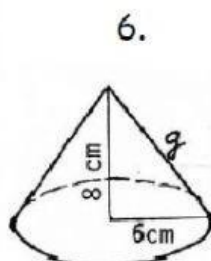
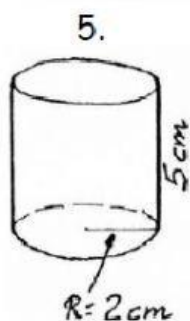
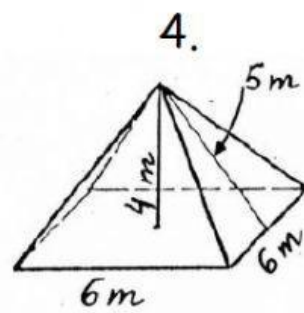
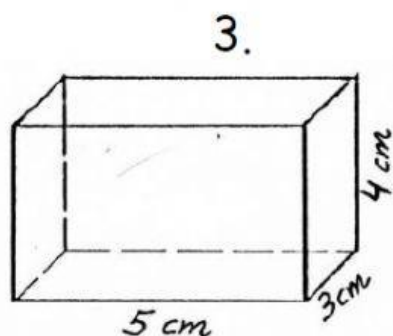
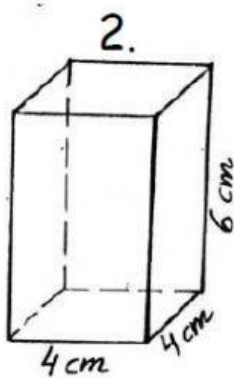
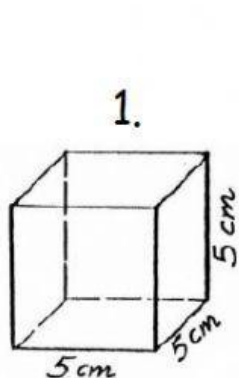


## ÁREAS Y VOLÚMENES 1

Calcular el área de la base, área lateral, área total y el volumen de las siguientes figuras:



## Respuestas

En las áreas y volúmenes en los que intervenga  $\pi$ , no multipliques por 3,14.  
Deja el resultado como un número por  $\pi$ . Por ejemplo  $236\pi$

	Área base	Área lateral	Área total	Volumen
Figura 1				
Figura 2				
Figura 3				
Figura 4				
Figura 5	$\pi$	$\pi$	$\pi$	$\pi$
Figura 6	$\pi$	$\pi$	$\pi$	$\pi$
Figura 7			$\pi$	$\pi$
Figura 8				
Figura 9				
Figura 10				
Figura 11				
Figura 12	$\pi$	$\pi$	$\pi$	$\pi$
Figura 13	$\pi$	$\pi$	$\pi$	$\pi$
Figura 14			$\pi$	$\pi$