

Name: _____

Date: _____

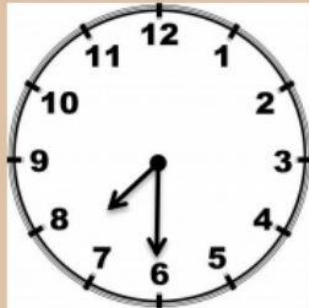
What is the time?

Write the digital time inside the box under each clock.

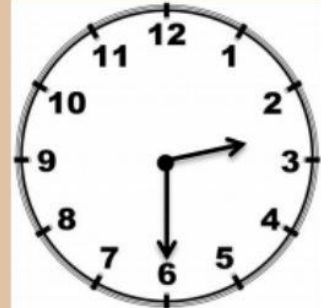
Then write the time in words under each box.



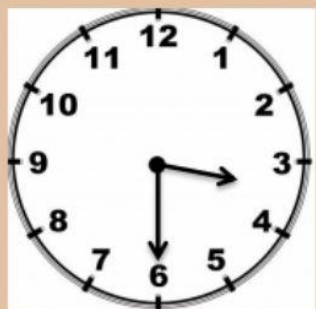
:



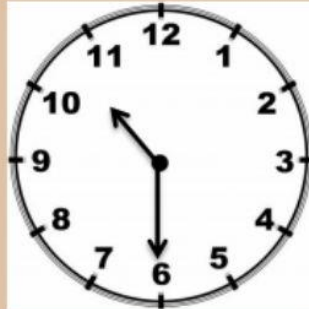
:



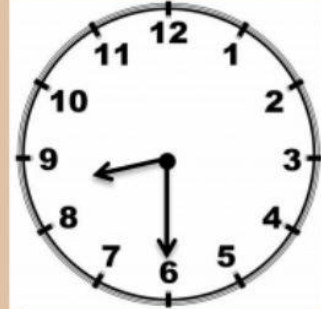
:



:



:



:

Write the digital time for each of the following.

1. half past twelve

:

2. half past nine

:

3. half past five

:

4. half past eleven

: