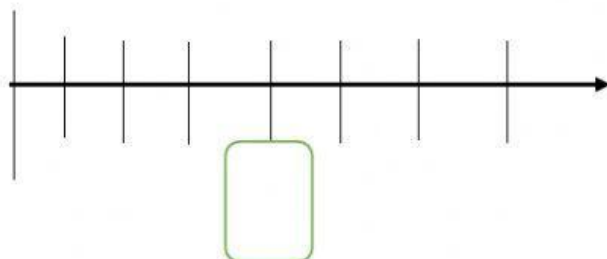


Fracciones
Recta numérica

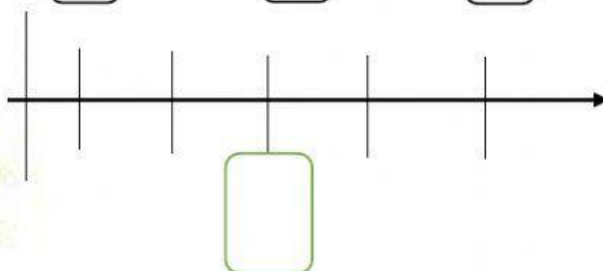
Selecciono la fracción que corresponde con el espacio indicado



$$\frac{2}{7}$$

$$\frac{7}{4}$$

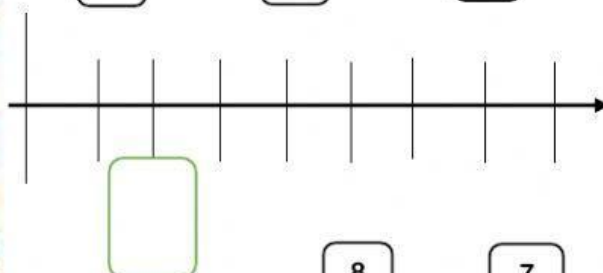
$$\frac{4}{7}$$



$$\frac{5}{5}$$

$$\frac{3}{5}$$

$$\frac{5}{3}$$



$$\frac{8}{2}$$

$$\frac{7}{2}$$

$$\frac{2}{8}$$