


























Indus International School Pune

Interpreting Pictographs

The pictograph below shows how much mail was processed by Pune Central Post Office. Use the pictograph to answer the questions.

DAY	PIECES OF MAIL PROCESSED AT THE STOWE POST OFFICE
Mon., July 6	    
Tues., July 7	     
Weds., July 8	    
Thurs., July 9	      
Fri., July 10	

Key:  = 200 Pieces of mail

1. What does each symbol stand for?
2. Which day did they process the most mail?
3. How much more mail was processed on Thursday than Monday?
4. A post office employee says, "we always process more mail on Monday's than we do on Tuesday's." Is this true? Explain your answer.
5. How many symbols would be used to represent 3000 pieces of mail on the pictograph?
6. 1800 pieces of mail were processed on July 10th. How many symbols would be used to represent the number?

Reflection

What do I know and understand about Pictographs?