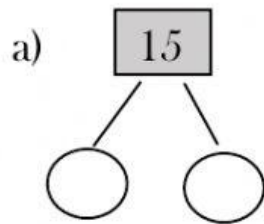


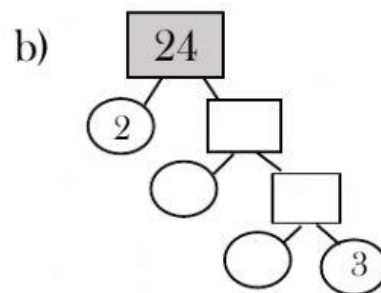
Name: _____

Prime Factorization

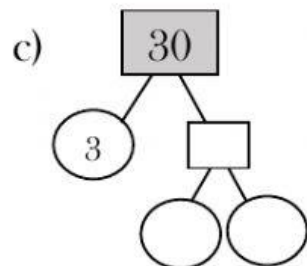
Complete the working then express the numbers as a product of their prime factors.



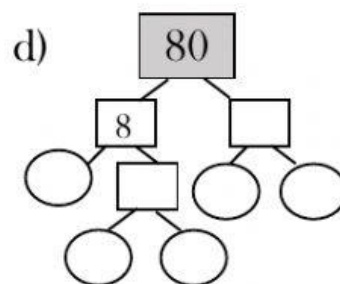
$$15 = _ \times _$$



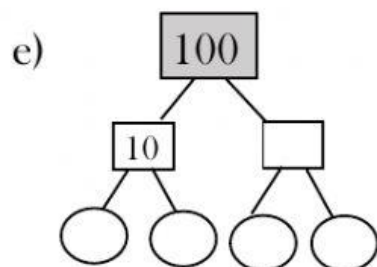
$$24 = _ \times _ \times _ \times _$$



$$30 = _ \times _ \times _$$



$$80 = _ \times _ \times _ \times _ \times _$$



$$100 = _ \times _ \times _ \times _$$

