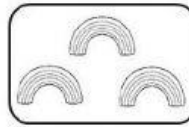
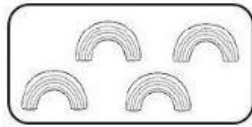

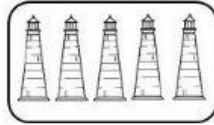


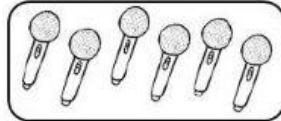
**Resuelve
las sumas.**




$4 + 3 = \square$




$5 + 5 = \square$




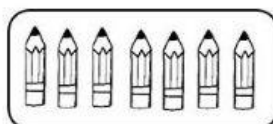
$6 + 2 = \square$



$2 + 8 = \square$



$2 + 7 = \square$



$7 + 3 = \square$