







Name: _____

Grade 1

NUMBERS 1 AND 2

Instructions: Tell how many are in each set.



	$\begin{matrix} / \\ 2 \end{matrix}$		$\begin{matrix} / \\ 2 \end{matrix}$
	$\begin{matrix} / \\ 2 \end{matrix}$		$\begin{matrix} / \\ 2 \end{matrix}$
	$\begin{matrix} / \\ 2 \end{matrix}$		$\begin{matrix} / \\ 2 \end{matrix}$

Instructions: Draw a line from the numeral to the number word.

$\begin{matrix} / \\ 2 \end{matrix}$

$\begin{matrix} two \\ one \end{matrix}$