



Name:-----


Date: October, 14th, 2020

Grade 4 -----

Score /20


CLASSWORK N 2

Divide the food between the kids & write the division equation.




$$\underline{\hspace{1cm}} \div \underline{\hspace{1cm}} = \underline{\hspace{1cm}}$$

How many bananas
does each kid get? $\underline{\hspace{1cm}}$




$$\underline{\hspace{1cm}} \div \underline{\hspace{1cm}} = \underline{\hspace{1cm}}$$

How many muffins
does each kid get? $\underline{\hspace{1cm}}$



$$\underline{\hspace{1cm}} \div \underline{\hspace{1cm}} = \underline{\hspace{1cm}}$$

How many pretzels
does each kid get? $\underline{\hspace{1cm}}$



$$\underline{\hspace{1cm}} \div \underline{\hspace{1cm}} = \underline{\hspace{1cm}}$$

How many cherries
does each kid get? $\underline{\hspace{1cm}}$