

KENDRIYA VIDYALAYA _____

Worksheet -1

Class - IV

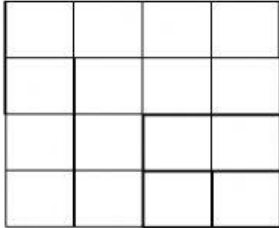
Subject:- Maths

Topic - Fields and Fences

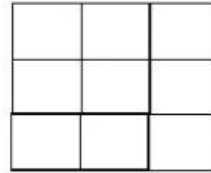
Name:- _____ R.N.-__ Date:- _____

No.01. Find the area of the given shapes.

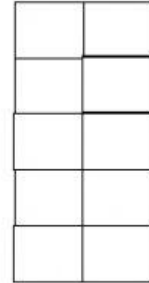
a)




c)



e)



b)



d)



No.02. Match the following shapes having equal area:-

