






PAKISTAN INTERNATIONAL SCHOOL JEDDAH – (English Section)
First Term 2020 – 2021


Subject	Type of Sheet	
Mathematics	Homework Sheet	
Name:	Y 2 -	Date:

Q1. Find the 2-digit number on your 100 square and count on. You can open 100 square chart on page 38 of your student book.


a. $43 + 5 =$  b. $34 + 9 =$  c. $65 + 7 =$ 

Q2. Write the number sentence and solve the problem.

29 shells
add 6 more equals
how many?

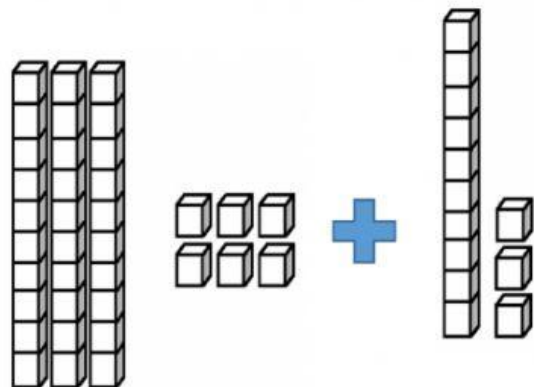


32 stickers
add 7 more equals
how many?



Q3. Use Base 10 to solve these problems. Write “TO” on the box to help you.

a. $36 + 13 =$



b. $44 + 21 =$

