



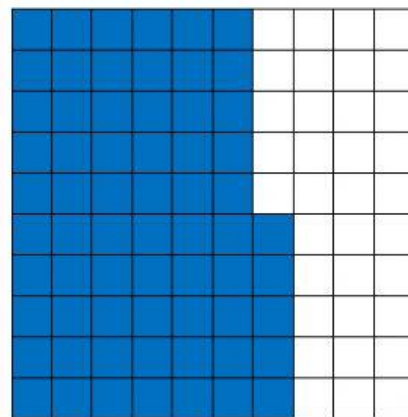
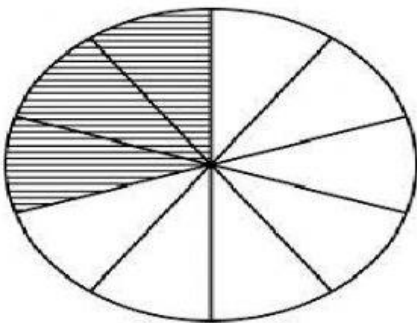
Write the decimals for the shaded portions:








3 .Write decimals for the following fractions:



Q1.Convert into decimals:

a)  $\frac{5}{10} =$  \_\_\_\_\_

b)  $\frac{75}{100} =$  \_\_\_\_\_

Q2. Convert into Fractions :

a)  $0.34 =$  \_\_\_\_\_

b)  $0.78 =$  .....