

Pizza Fractions

How much Pizza is missing as a fraction? We've done the first one for you.



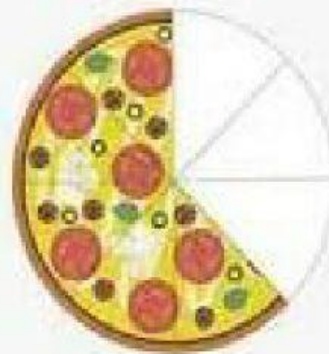
➤ $\frac{1}{8}$




➤ $\frac{\quad}{\quad}$



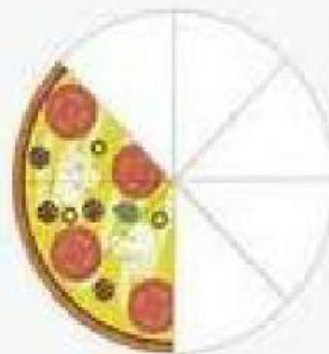
➤ $\frac{\quad}{\quad}$



➤ $\frac{\quad}{\quad}$



➤ $\frac{\quad}{\quad}$



➤ $\frac{\quad}{\quad}$



➤ $\frac{\quad}{\quad}$



➤ $\frac{\quad}{\quad}$