












Name: \_\_\_\_\_ Date: \_\_\_\_\_

### ADDITION & SUBTRACTION PROBLEMS

		WORKING OUT
1)	I buy 8  . I eat 4  . How many are left? _____	
2)	There are 3  . 6 more  come along. How many are there in total? _____	
3)	There are 7  . 3  are cut down. What is 7 minus 3? _____	
4)	Newton has 4  . Sally has 6  . What is the sum? _____	
5)	I have \$10. I spend \$3. How much do I have left? _____	
6)	There are 8  . 6  fly away. How many  are there now? _____	