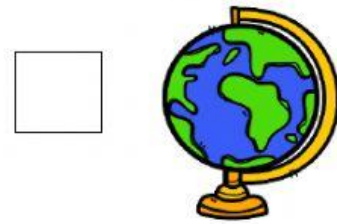


Where is The Bahamas Activity?

Directions: Write the number in the box that matches the correct picture.

1. The picture that shows line of latitude that is midway between the North and the South Poles.



2. The picture that shows the smallest ocean is.



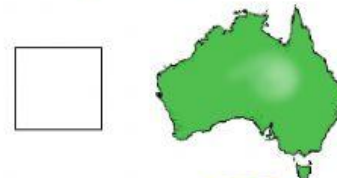
3. The pictures that shows the shape of planet Earth is



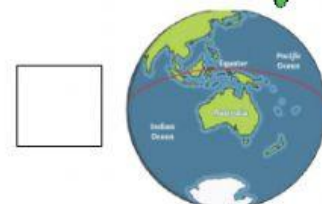
4. The picture that shows the largest continent is



5. Which continent is also an island?



6. Which shows the country in which you live?



7. Which shows the Northern Hemisphere or the Southern Hemisphere?

