

KENDRIYA VIDYALAYA SANGATHAN

AHMEDABAD REGION

LIVE WORKSHEET

CLASS : 2

SUBJECT : MATHS

TOPIC : LINES AND LINES

NAME OF THE STUDENT: _____

Q : 1 CLASSIFY THE OBJECTS AS STANDING, SLANTING, SLEEPING OR CURVED.

1




2



3



4



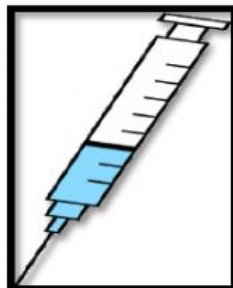
5




6



7




8



9



10



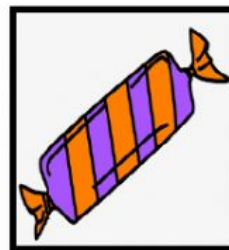
11



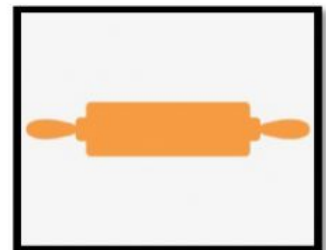
12



13



14



STANDING

SLEEPING

SLANTING

CURVED

Q : 2 MATCH THE FOLLOWINGS.

A

- Curved line
- Standing line
- Slanting line
- Sleeping line

B



Q : 3 COUNT AND WRITE NUMBER OF STANDING, SLEEPING, SLANTING AND CURVED LINE IN GIVEN DIGIT.



STANDING LINES

SLEEPING LINES

SLANTING LINES

CURVED LINES